



Thin-film Model for Discharge Process of Li-O₂ Battery

Yinghui Yin, Alejandro A. Franco



Université de Picardie Jules Verne (Amiens, France)
Laboratoire de Réactivité et Chimie de Solides • CNRS
Research Network on Electrochemical Energy Storage
ALISTORE European Research Institute

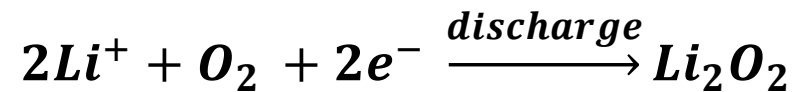
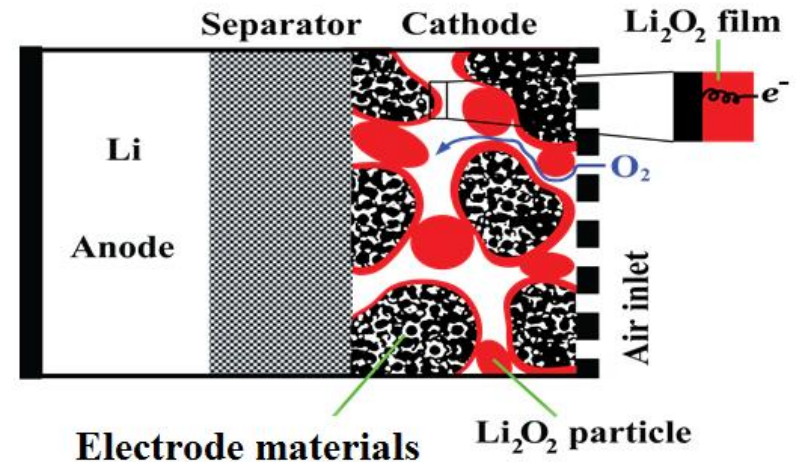
Introduction

Theoretical Capacity:

$$Q = \frac{nF}{M} = 1165 \text{ mAh/g}_{\text{Li}_2\text{O}_2}$$

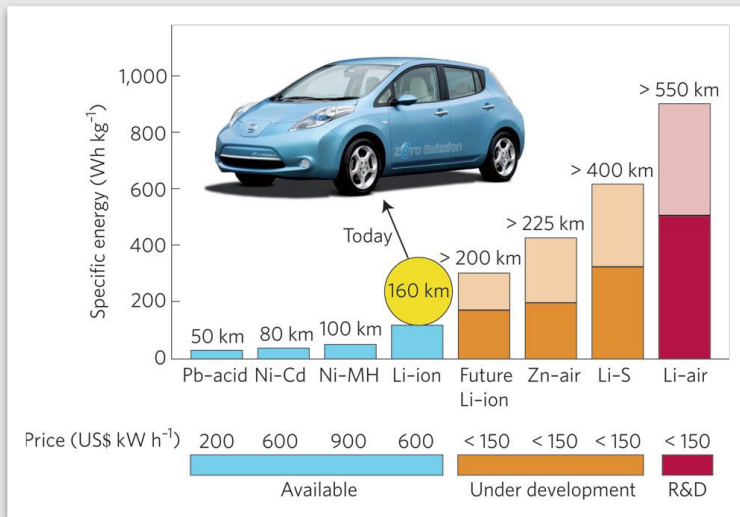
n : number of electrons

M : molar mass of active material



Challenges:

- Insufficient O_2 transport
- Low reaction kinetics
- Insulating discharge products
-



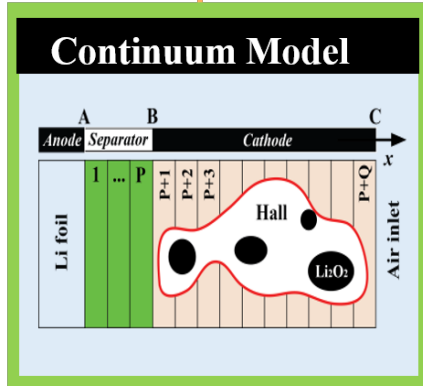
P.G. Bruce *et al.* *Nature Materials* **11**, 19 (2012) .

Multiscale Modeling of Li-air Batteries

Multiparadigm

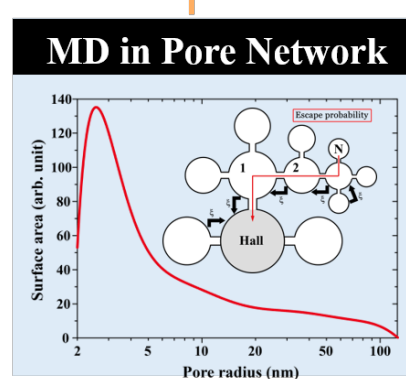
Multiscale

Multiphysics




10^{-3} m

Cell Model

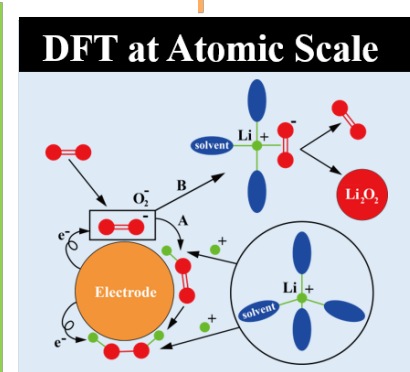


10^{-7} m

Electrode Microstructure



10^{-8} m



10^{-10} m

Reaction

Introduction

Identify the Problem

Translate to Equations

Solve the Equations

Analyze the Results

Introduction

Identify the Problem



Translate to Equations



Solve the Equations

Analyze the Results

- Mass Transport

Fick's Law of Diffusion

- Electrochemical Reaction

Bulter-Volmer Equation

- Electron Tunneling

Error Function

Introduction

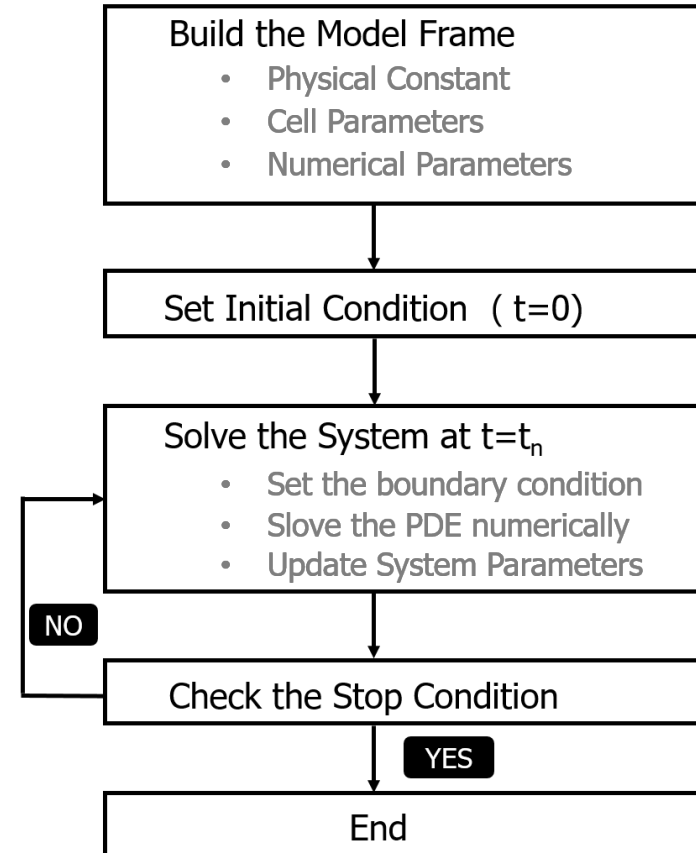
Identify the Problem

Translate to Equations

Solve the Equations

Analyze the Results

Simulation Flow-Chart



Introduction

Identify the Problem

Translate to Equations

Solve the Equations

Analyze the Results



- Parameter Sensitivity Tests
- Check the consistency of theory
- Compare with Experimental results
- ...

Scheme of the Practice

- Part-I Oxygen Diffusion
- Part-II O₂ Transport with Consumption
- Part-III Thin-film model

Part-I Oxygen Diffusion

Fick's First Law

$$J = D \frac{\partial C}{\partial x}$$

Mass Balance Equation

$$\frac{\partial C}{\partial t} = \frac{\partial J}{\partial x} = \frac{\partial}{\partial x} (D \frac{\partial C}{\partial x})$$

Diffusion in Porous Medium

$$D_e = \frac{\varepsilon}{\tau} D_0 = \varepsilon^\beta D_0$$

$$\frac{\partial C}{\partial t} = \frac{\partial J}{\partial x} = \frac{\partial}{\partial x} (D_0 \varepsilon^\beta \frac{\partial C}{\partial x})$$

ε : porosity of medium

β : bruggeman coefficient

D_0 : bulk diffusion coefficient

Solve the PDE

Numerical Method

Finite Difference Method

$$\frac{\partial C}{\partial t} = \frac{\partial J}{\partial x} = \frac{\partial}{\partial x} \left(D_0 \varepsilon^\beta \frac{\partial C}{\partial x} \right)$$

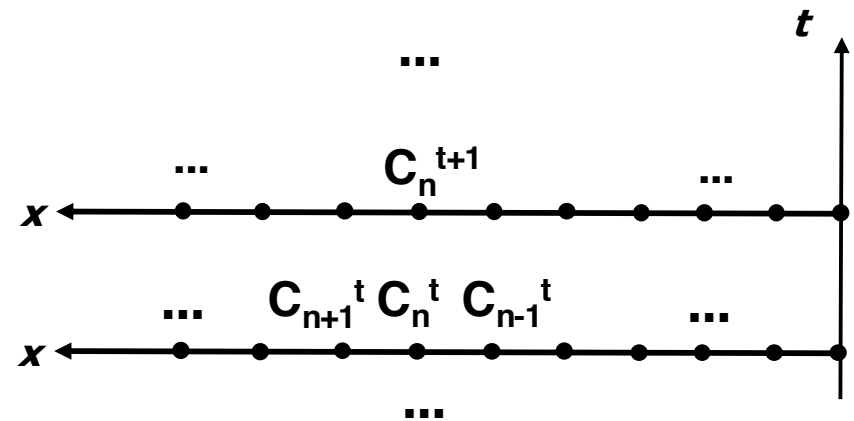
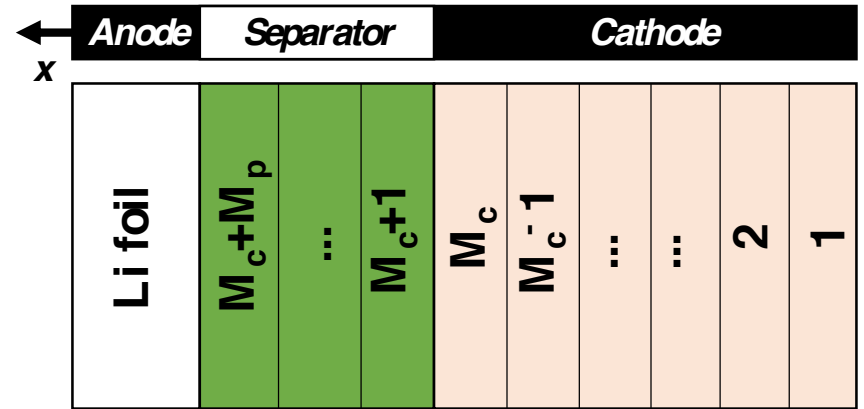
Discretization

$$\frac{\partial C_n}{\partial t} \cong \frac{C_n^{t+1} - C_n^t}{\Delta t}$$

$$C_{n+1} - C_n \cong \frac{\Delta x}{1!} \cdot \frac{\partial C_n}{\partial x} + \frac{\Delta x^2}{2!} \cdot \frac{\partial^2 C_n}{\partial x^2}$$

$$C_n - C_{n-1} \cong \frac{\Delta x}{1!} \cdot \frac{\partial C_n}{\partial x} - \frac{\Delta x^2}{2!} \cdot \frac{\partial^2 C_n}{\partial x^2}$$

$$\frac{\partial^2 C_n}{\partial x^2} \cong \frac{\Delta t}{\Delta x^2} (C_{n+1}^t - 2C_n^t + C_{n-1}^t)$$



$$C_n^{t+1} = \frac{\varepsilon^\beta D_0 \Delta t}{\Delta x^2} (C_{n+1}^t - 2C_n^t + C_{n-1}^t) + C_n^t$$

Initial/Boundary Conditions

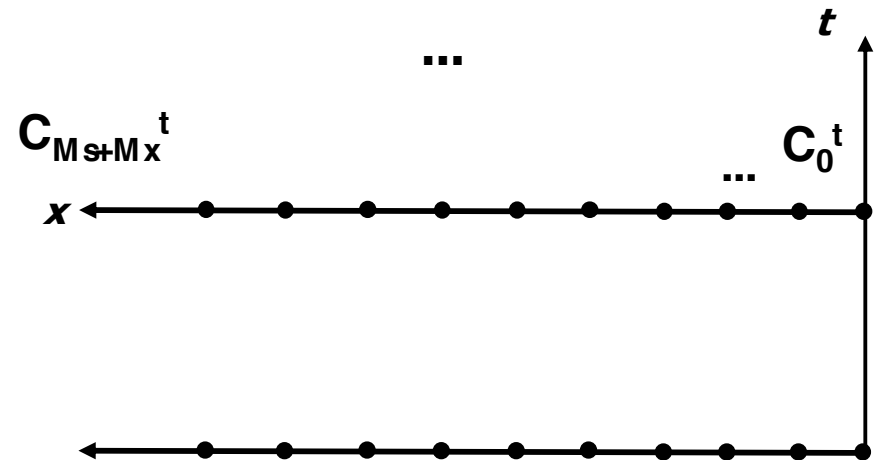
Initial Condition:

$$C(x, t = 0) = 0$$

Boundary Conditions:

$$C(x = 0, t) = C_{sat}$$

$$J(x = M_c + M_s, t) = 0$$



```
%% Initial conditions
C = zeros(1,Mc+Ms); % Saturation concentration of O2

%% Boundary conditions
% Constant concentration at O2 inlet (x = 0)
C(1) = (DeCat*dt/dx/dx)*(C_old(2)-2*C_old(1)+C_sat)+C_old(1);
% 0 flux at anode side (x = Mc+Ms)
C(Mc+Ms) = (DeSep*dt/dx/dx)*(C_old(Mc+Ms-1)-C_old(Mc+Ms))+C_old(Mc+Ms);
```




Exercise-1

1. Change the value of cathode porosity (poroCat) to 0.6 and 0.9 to see its impacts on the diffusion.



Link to experiment: cathode structure

2. Change the value of diffusion coefficient of O_2 (D_0) to $5E-9$ and $2E-10$ to see its impacts on the diffusion.

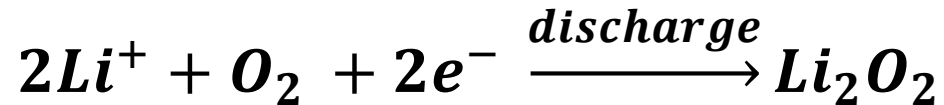


Link to experiment: electrolyte property

3. What else parameters will affect the diffusion? Which components will it have impacts on?

Part II – Transport with Consumption

Discharge Reaction of Li-O₂



Mass Balance Equation

$$\frac{\partial C}{\partial t} = \frac{\partial}{\partial x} \left(\frac{D_0 \varepsilon^\beta \partial C}{\partial x} \right) + \mathbf{v}$$

```
% Solve the transport
for i = 2:Mc+Ms-1
    C(i) = (DeCat*dt/dx/dx)*(C_old(i+1)-2*C_old(i)+C_old(i-1))+C_old(i)-Source(i)*dt;
end
```

Reaction Kinetics

Bulter-Volmer Equation

$$i = nFk^0 \left(\prod c_{f,j}^{s_i} \right) \exp \left(\frac{-\alpha nF}{RT} (U - U_o) \right)$$

k^0 : heterogeneous rate constant

Reaction Rate

$$I = \sum_j I_j = \sum_j nFk^0 A_j \left(\prod c_{f,j}^{s_i} \right) \exp \left(\frac{-\alpha nF}{RT} (U - U_o) \right)$$

A_j : active surface area in the j^{th} bin

$$v_j = \frac{I_j}{nF}$$


```
% Calculate the source term
KAC = k * a_sp * dx .* C / Cref ;

KAC_tot = sum(KAC) ;
U = U0 - (R * T / (2 * alpha * Far)) * log(I / KAC_tot) ;
if KAC_tot ~= 0
    Source = KAC ./ KAC_tot .* (I / 2 / Far) / dx ;
end
```



Exercise-2

1. Change the value of k^0 (k) to $1E-3$ and $1E-5$ to see its impacts.



Link to experiment: surface property of cathode materials

2. Change the value of specific surface area (a_{sp}) to $1E5$ and $1E7$ to see its impacts.



Link to experiment: cathode structure

3. Which other parameters will affect the results?

Part III – Thin-film Model of LAB

- As an insulator , thickness of Li_2O_2 \uparrow , reaction kinetics \downarrow

Active Surface Area

$$A = SP_{tnl} = S \left(1 - \frac{\text{erf}(r - r_{lim})}{2} \right)$$

Implement tunneling effects

```
% Calculate the source term  
AcS = GeoS .* theta(delta);  
KAC = k .* AcS * dx .* C / Cref ; %KAC
```

Update thickness

```
%Update the thickness of film  
delta = delta + Source * MolarMass / Density / (a_sp * dx);
```




Exercise - 3

1. Compare the discharge curves before and after implementing tunneling effects?



Link to experiment: the "sudden death" phenomenon

2. Change the cathode thickness (L_{cat}) to $1E3$ and see its impacts on the result?

3. Can you propose an approach to build the thin-film model when there is a porosity gradient along the cathode?



Hint: solve $z = \varepsilon C$ instead of C