



*The Abdus Salam
International Centre for Theoretical Physics*



2177-15

**ICTP Latin-American Basic Course on FPGA Design for Scientific
Instrumentation**

15 - 31 March 2010

**Digital arithmetic I
(number representations)**

BAZARGAN SABET Pirouz
*LIP6, University Pierre et Marie Curie
Paris
France*

Outline

- Digital CMOS design
 - Boolean algebra
 - Basic digital CMOS gates
 - Combinational and sequential circuits
 - Coding - Representation of numbers

CMOS Circuits

How can I design a digital circuit ?

- A set of gates (cell library)

combinational gates

memory elements



CMOS Circuits

How can I design a digital circuit ?

- Method to design combinational circuits

Karnaugh table (local optimization)

no method for global optimization

 synthesis tools

CMOS Circuits

How can I design a digital circuit ?

- Specify the circuit

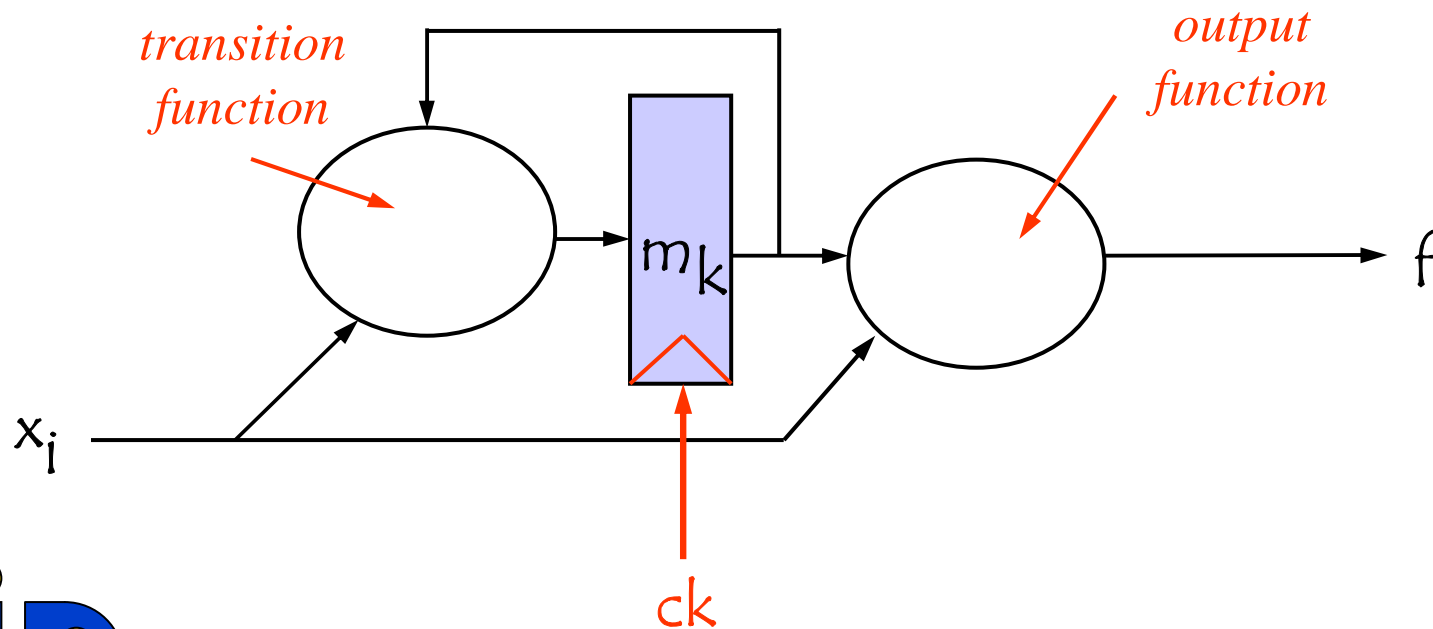
Combinational circuit : Boolean functions

Sequential circuit ?



CMOS Circuits

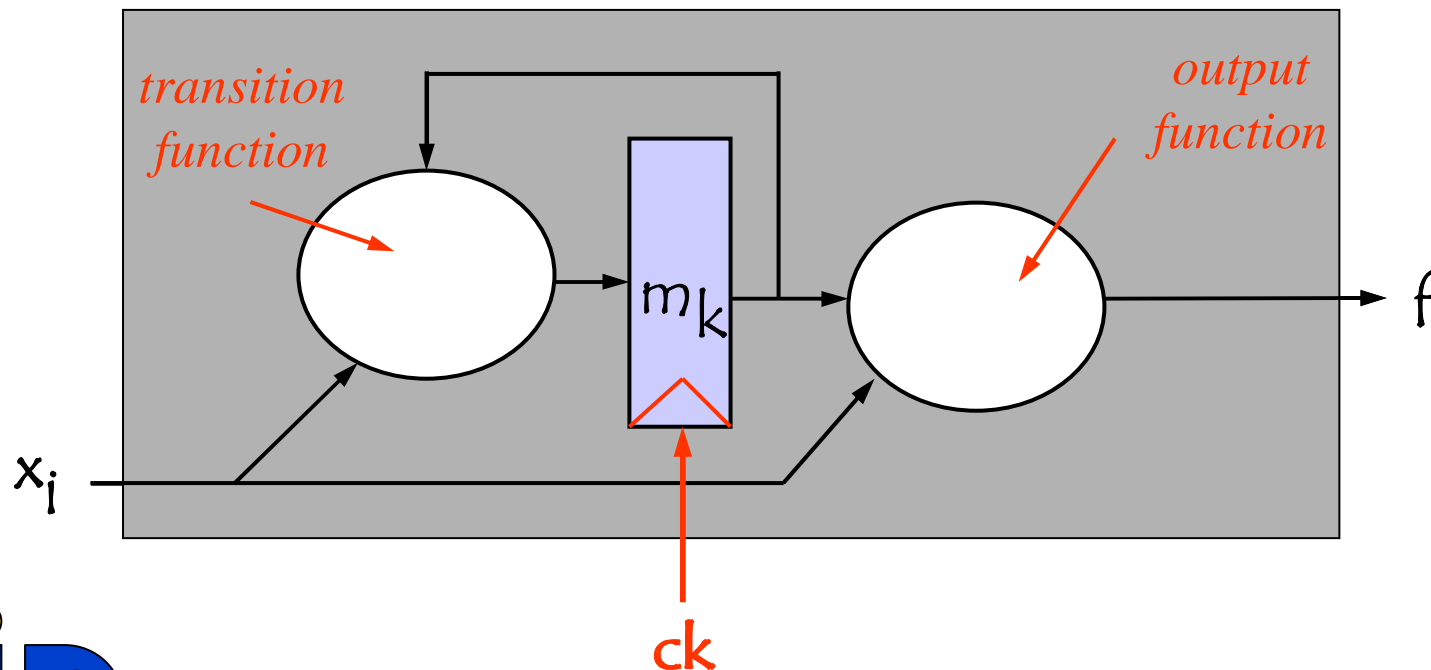
● Sequential Circuit



CMOS Circuits

How can I design a sequential circuit ?

I need a method to go from a black box to a white box



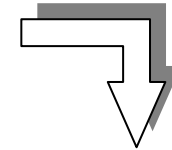
CMOS Circuits

How can I design a sequential circuit ?

The starting point (what I know)

What the circuit is supposed to do

Capture this knowledge into a
representation that can be
transposed into Boolean functions



The aim

How it will do it

number of required
memory elements



CMOS Circuits

Representation of a sequential circuit ?

● State graph

G = (X, Y, S, T,

O)

X : input variables

Y : output variables

S : states

T : transitions

O : output set conditions

CMOS Circuits

● **G** = (X, Y, S, T,
O)

T : set of transitions

$t \in T, \quad t = (s, s', f)$

$s \in S$: source state

$s' \in S$: target state

$f \in \mathbf{B}_n$: transition condition

CMOS Circuits

● **G** = (X, Y, S, T,
O)

O : output set conditions

$o \in O, \quad o = (y, s, c)$

$y \in Y$: output variable

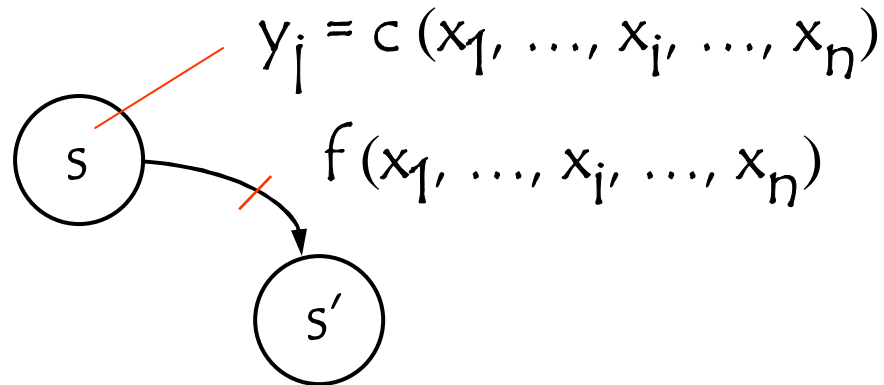
$s \in S$: state

$c \in \mathbf{B}_n$: output set condition

CMOS Circuits

- Let consider a graph $\mathbf{G} = (X, Y, S, T, O)$

Graphic representation of \mathbf{G}



CMOS Circuits

Representation of a sequential circuit ?

- State graph

Transpose into a graphic representation the expected behavior of a sequential system

$$\mathbf{G} = (X, Y, S, T, O)$$

CMOS Circuits

● Example

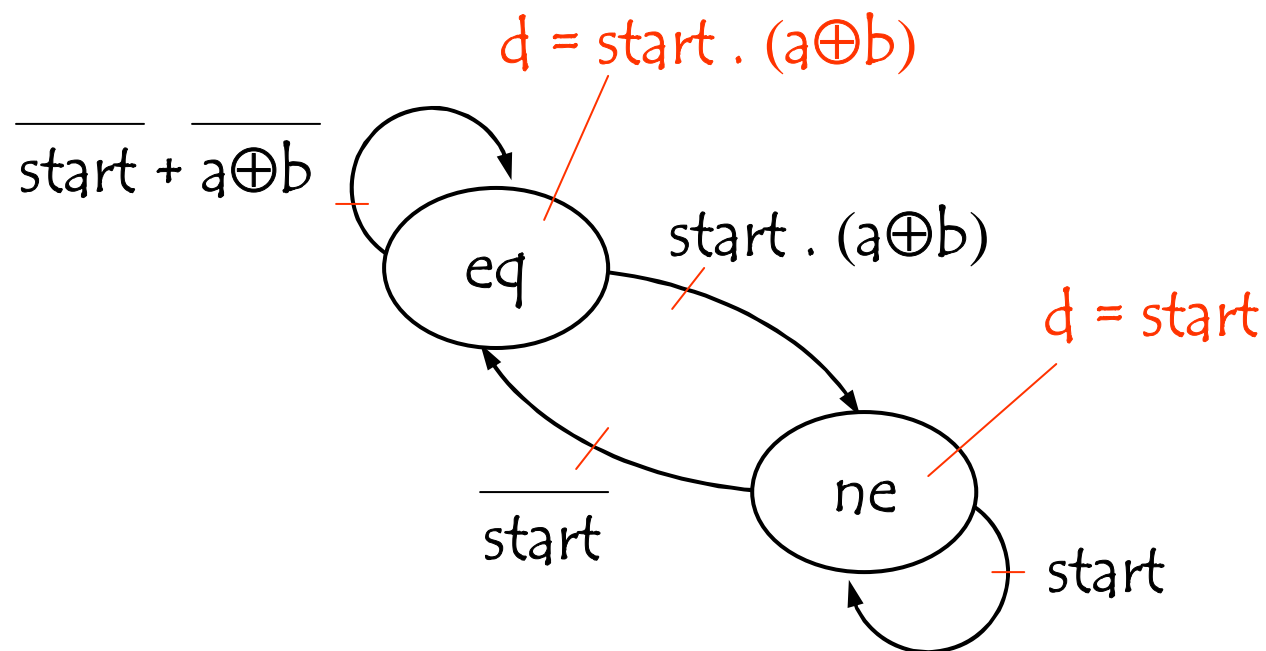
Two signals a , b each transmitting a series of bits (1 bit at a cycle)

Design a system that sets a flag d if the value transmitted by a is different than b



CMOS Circuits

Example



CMOS Circuits

Representation of a sequential circuit ?

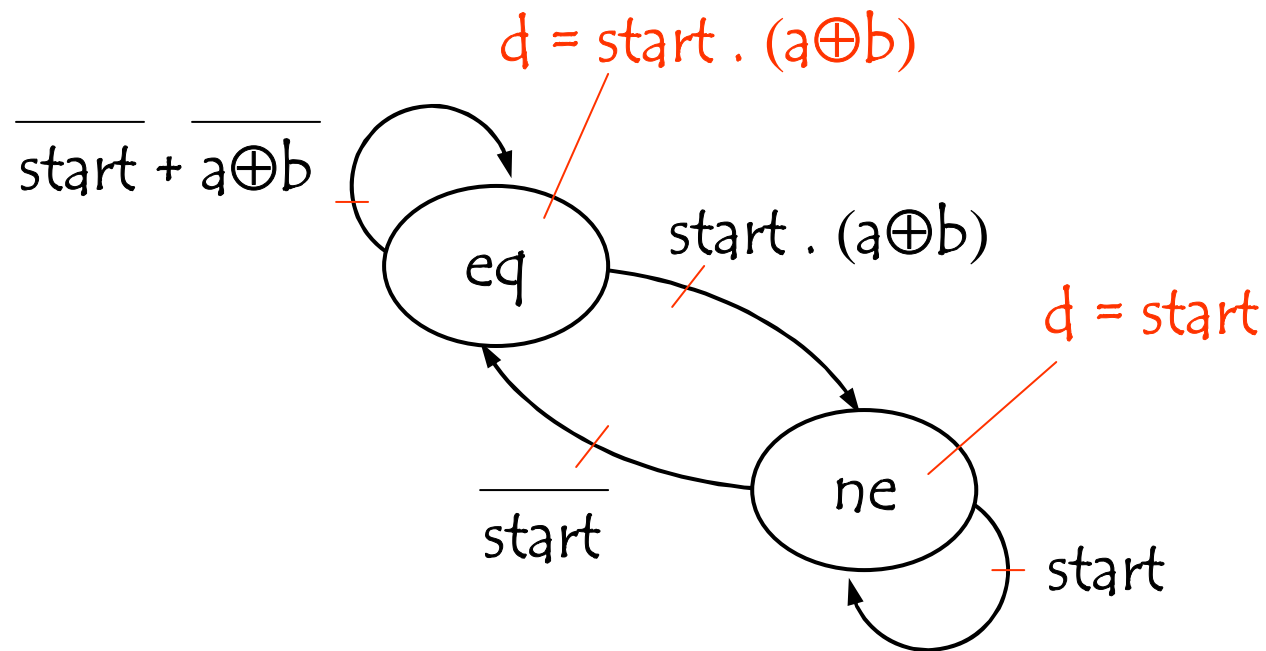
- State graph

$$\mathbf{G} = (X, Y, S, T, O)$$

define the number of memory elements
required to represent $S : M$

CMOS Circuits

Example



CMOS Circuits

Representation of a sequential circuit ?

- State graph

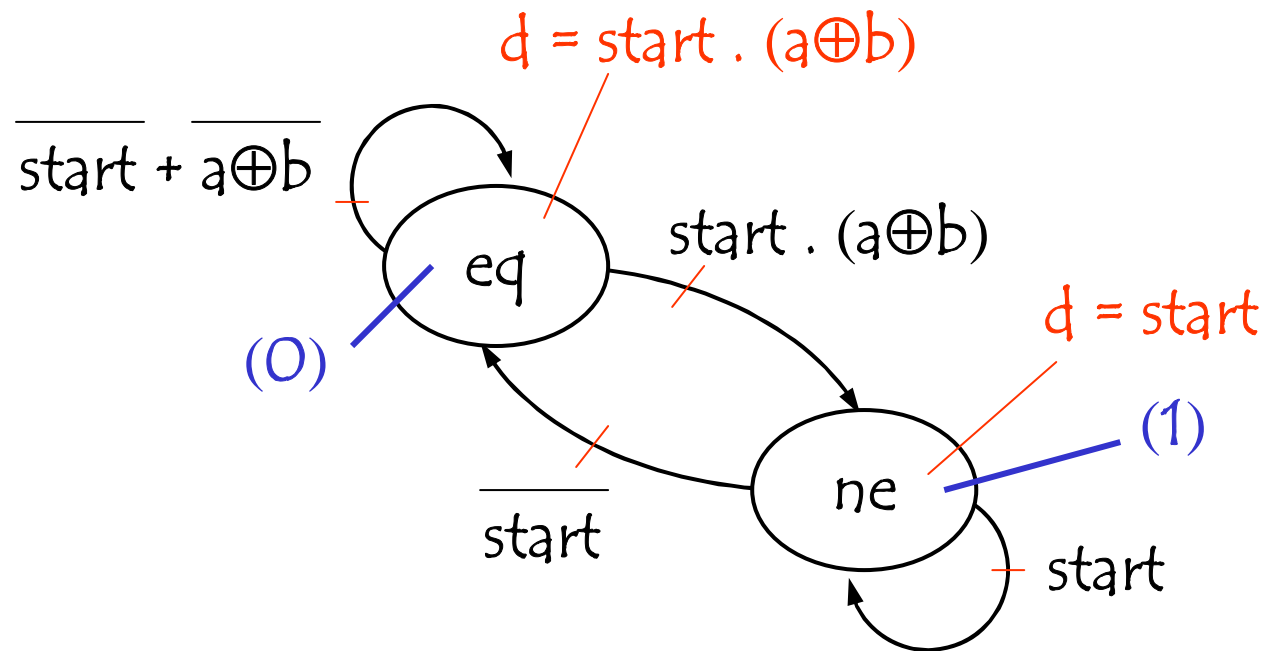
$$\mathbf{G} = (X, Y, S, T, O)$$

define the number of memory elements
required to represent $S : M$

represent each state s by a vector of M

CMOS Circuits

Example



2 states \longrightarrow 1 memory element

CMOS Circuits

Representation of a sequential circuit ?

- State graph

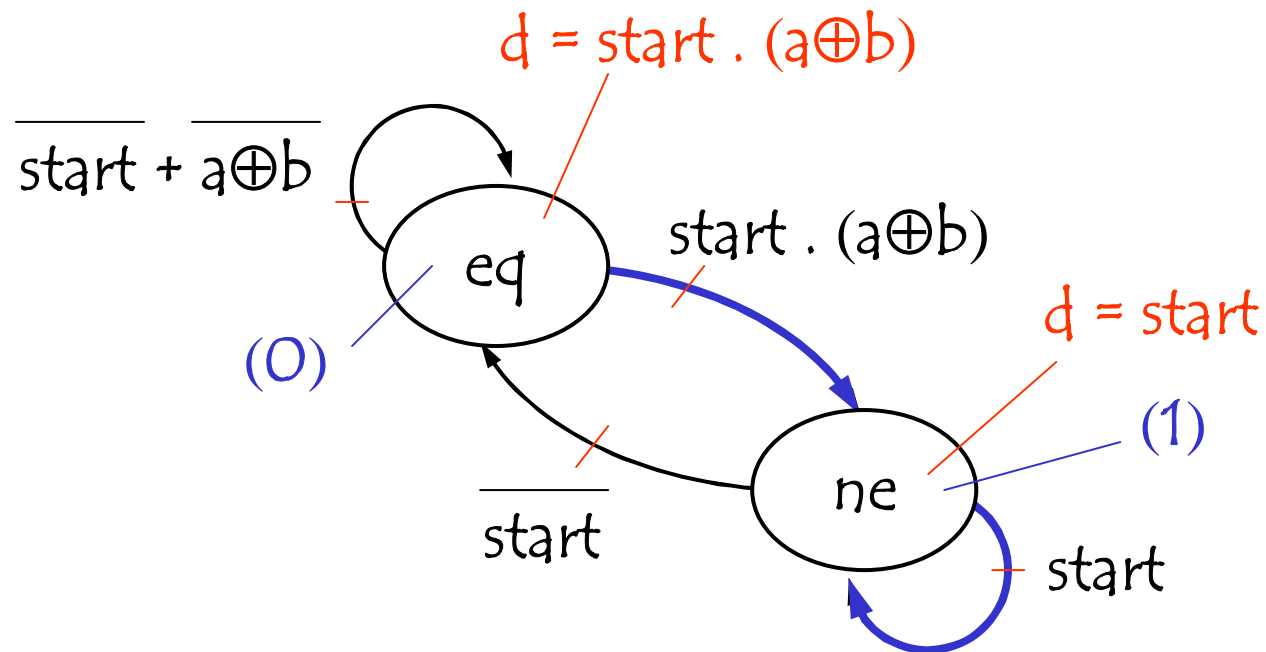
$$\mathbf{G} = (X, Y, S, T,$$

define the ^O*transition function* : m_k

m_k = sum of the Boolean function of the transitions
that have as target a state where $m_k=1$

CMOS Circuits

Example



$$m_1 = \overline{m_1} . \text{start} . (a \oplus b) + m_1 . \text{start}$$

CMOS Circuits

Representation of a sequential circuit ?

- State graph

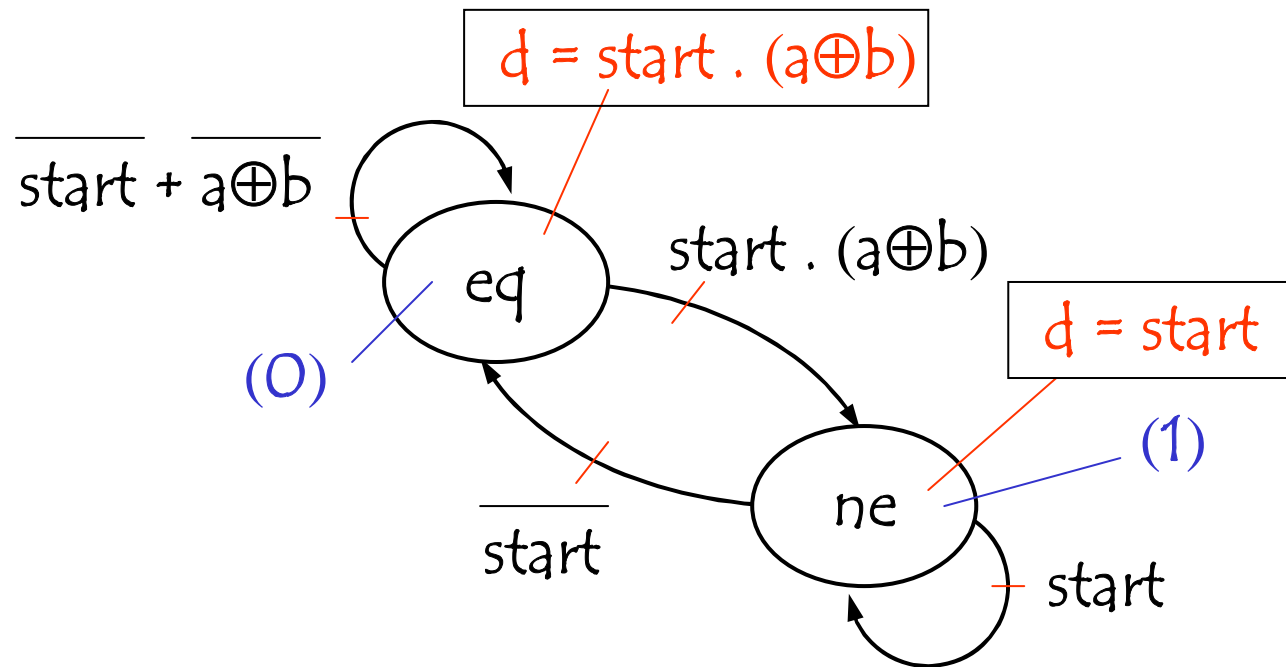
$$\mathbf{G} = (X, Y, S, T,$$

define the ^Ooutput function : y_i

$y_i =$ sum of the output conditions concerning y_i

CMOS Circuits

Example



$$d = \overline{m_1} \cdot \text{start} \cdot (a \oplus b) + m_1 \cdot \text{start}$$

CMOS Circuits

Representation of a sequential circuit ?

- State graph

$\mathbf{G} = (X, Y, S, T,$
 $\textcircled{O})$
implement the Boolean functions : m_k, y_i

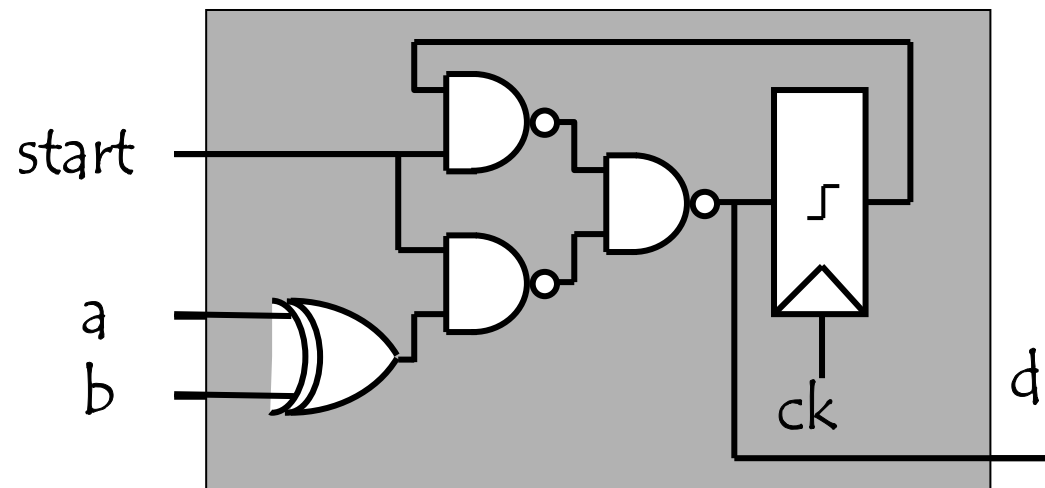
CMOS Circuits

Example

$$m_1 = \overline{m_1}.\text{start}.(a \oplus b) + m_1.\text{start}$$

$$d = \overline{m_1}.\text{start}.(a \oplus b) + m_1.\text{start}$$

$$m_1 = \text{start} . (a \oplus b) + \text{start} . m_1$$



CMOS Circuits

How can I design a sequential circuit (summary) ?

● **G** = (X, Y, S, T,



graphic representation of the behavior



define the number of memory elements
required to represent $S : M$



represent each state by a vector of M



define the *transition function*



define the *output function*



implement the Boolean functions